
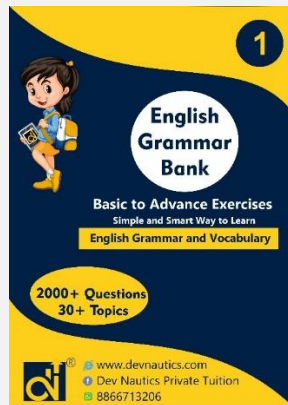



# Dev Nautics Intelligent Library- Class 1




Maths (NCERT)



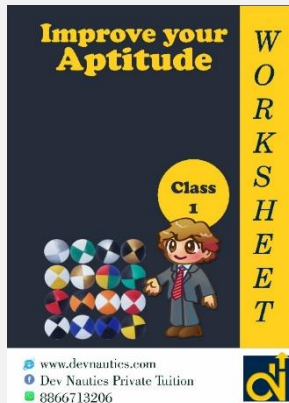
English Grammar Bank




Mental Maths



Maths Olympiad



Aptitude



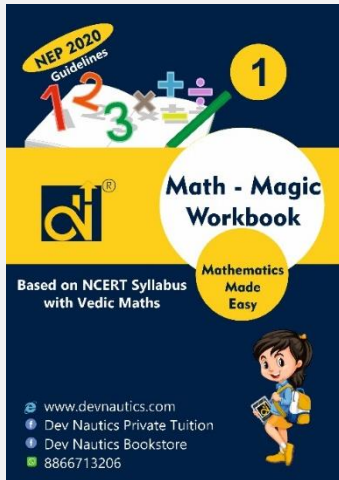
Mental Ability



General Knowledge



Combo pack



**MRP: ₹ 500**

## Topics Covered:

- Shapes and Space
- Numbers from One to Nine
- Addition
- Subtraction
- Numbers from Ten to Twenty
- Time
- Measurement
- Numbers from Twenty One to Fifty
- Data Handling
- Patterns
- Numbers
- Money
- How Many

## Maths (NCERT)

### Key Features:

- A unique Workbook Series for Primary Class Students
- Simple Language with Relevant Pictures
- Specially Designed for Easy Grasp by Primary Class Students
- Contains Enough Practice Questions are framed by twisting the language to enhance understanding

### Exercise Pattern:

- Picture Based Exercise
- Problem Solving Exercise

## Index

Worksheet	Page Number
Chapter – 1 – Shapes and Space	1 to 14
Assignment – 1 to 5	15 to 19
Test – 1	20
Chapter – 2 – Numbers from One to Nine	21 to 32
Assignment – 6 to 13	33 to 40
Test – 2	41
Chapter – 3 – Addition	42 to 47
Assignment – 14 to 17	48 to 51
Test – 3	52
Chapter – 4 – Subtraction	53 to 59
Assignment – 18 to 21	60 to 63
Test – 4	64
Chapter – 5 – Number from Ten to Twenty	65 to 71
Assignment – 22 to 25	72 to 76
Test – 5	77
Chapter – 6 – Time	78 to 80
Assignment – 26 to 27	81 to 82
Test – 6	83
Chapter – 7 – Measurement	84 to 92
Assignment – 28 to 32	93 to 97
Test – 7	98
Chapter – 8 – Numbers from Twenty One to Fifty	99 to 106
Assignment – 33 to 34	107 to 108
Test – 8	109
Chapter – 9 – Data Handling	110 to 115
Assignment – 35	116
Test – 9	117
Chapter – 10 – Pattern	118 to 122
Assignment – 36 to 37	123 to 124
Test – 10	125
Chapter – 11 – Numbers	126
Assignment – 38	127
Test – 11	128
Chapter – 12 – Money	129 to 134
Assignment – 39 to 40	135 to 136
Test – 12	137
Chapter – 13 – How Many	138 to 142
Assignment – 41 to 42	143 to 144
Test – 13	145

## Biggest-Smallest

(a) Tick (✓) the smallest tree.



(b) Tick (✓) the biggest animal.



(c) Circle the smallest object.



(d) Colour the biggest duck.



(e) Tick (✓) the biggest balloon / bubble.



## Assignment – 2:

A. Tick (✓) the object which is on the top and cross (X) the object which is at the bottom:



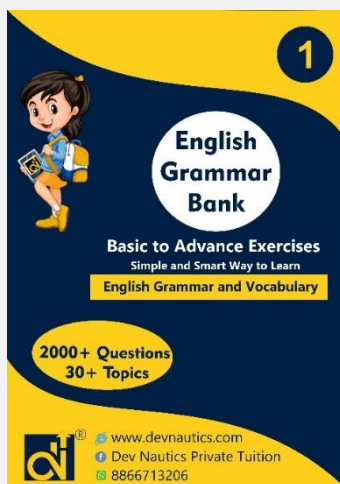
B. Tick (✓) the object nearer to the boy and cross (X) the object farther from the boy:



C. Tick (✓) the tree nearest to the bird and cross (X) the tree farthest from the bird:



# Dev Nautics - Grade 1



**MRP: ₹ 500**

## Topics Covered:

- Alphabetical Order
- Punctuation
- The Sentence
- Articles
- Noun
- Pronoun
- Adjective
- Verb
- Preposition
- Conjunction
- Tense
- Synonyms and Antonyms
- Suffix and Prefix
- Compound Words
- Jumbled Words
- Homonyms and Homophones

## English Grammar Bank

### Key Features:

- 30+ Topics
- 2000+ Questions
- Strengthen your Vocabulary
- Empower the structure sentence correctly

### Exercise Pattern:

- Basic to Advanced Exercise

## Index

Worksheet	Page Number
Chapter – 1 – Alphabetical Order	1 to 12
Chapter – 2 – Punctuation	13 to 18
Chapter – 3 – The Sentence	19 to 22
Chapter – 4 – Asking Questions	23 to 24
Chapter – 5 – Articles	25 to 27
Chapter – 6 – Naming Words	28 to 32
Chapter – 7 – Common and Proper Noun	33 to 35
Chapter – 8 – Collective Noun	36
Chapter – 9 – Noun: Singular and Plural	37 to 41
Chapter – 10 – Noun: Gender	42
Chapter – 11 – Possessive Noun ('s)	43 to 44
Chapter – 12 – Pronoun	45 to 51
Chapter – 13 – Adjective	52 to 59
Chapter – 14 – Verb (Present, Past and Future)	60 to 65
Chapter – 15 – Possessive Verb (Has, Have, Had)	66 to 67
Chapter – 16 – Preposition	68 to 70
Chapter – 17 – Conjunction	71 to 73
Chapter – 18 – Tense (Present, Past and Future)	74 to 75
Chapter – 19 – Present Continuous Tense (Is, Am, Are)	76 to 77
Chapter – 20 – Past Continuous Tense (Was, Were)	78
Chapter – 21 – Synonyms and Antonyms	79 to 83
Chapter – 22 – Suffix and Prefix	84 to 88
Chapter – 23 – Compound Words	89 to 90
Chapter – 24 – Jumbled Words	91
Chapter – 25 – Missing Letters	92
Chapter – 26 – Homonyms	93 to 94
Chapter – 27 – Homophones	95 to 96
Chapter – 28 – Word Usage	97 to 99
Chapter – 29 – Sentence Formation	100 to 102
Chapter – 30 – Correct Word	103 to 107

### G.1 Write the below words in alphabetical order.

a) come again took far part dark blew gang nose know

- 1) \_\_\_\_\_
- 2) \_\_\_\_\_
- 3) \_\_\_\_\_
- 4) \_\_\_\_\_
- 5) \_\_\_\_\_
- 6) \_\_\_\_\_
- 7) \_\_\_\_\_
- 8) \_\_\_\_\_
- 9) \_\_\_\_\_
- 10) \_\_\_\_\_

b) fog shut hill fort add pave end kind dark orange

- 1) \_\_\_\_\_
- 2) \_\_\_\_\_
- 3) \_\_\_\_\_
- 4) \_\_\_\_\_
- 5) \_\_\_\_\_
- 6) \_\_\_\_\_
- 7) \_\_\_\_\_
- 8) \_\_\_\_\_
- 9) \_\_\_\_\_
- 10) \_\_\_\_\_

c) stop far plan hush stop fag clean apart grit coat

- 1) \_\_\_\_\_
- 2) \_\_\_\_\_
- 3) \_\_\_\_\_
- 4) \_\_\_\_\_
- 5) \_\_\_\_\_
- 6) \_\_\_\_\_
- 7) \_\_\_\_\_
- 8) \_\_\_\_\_
- 9) \_\_\_\_\_
- 10) \_\_\_\_\_

- 16) monday august 29 1945 \_\_\_\_\_
- 17) wednesday october 1 2003 \_\_\_\_\_
- 18) friday march 12 2014 \_\_\_\_\_
- 19) sunday june 23 1995 \_\_\_\_\_
- 20) tuesday november 31 1986 \_\_\_\_\_
- 21) thursday february 5 1976 \_\_\_\_\_

### G.2 Use commas to separate words in a series. One has been done for you.

1) I have an apple a clementine a sandwich and a granola bar in my lunch.

I have an apple, a clementine, a sandwich and a granola bar in my lunch.

2) Nick likes to play soccer baseball and hockey.

\_\_\_\_\_

3) Natasha has one older sister one younger sister and a brother.

\_\_\_\_\_

4) Put the utensils the dishes and the glasses on the table.

\_\_\_\_\_

5) There are pencils erasers and scissors on each table.


\_\_\_\_\_

6) Give me some glue some paper and the markers.

\_\_\_\_\_

7) The teacher smiled waved and left.

\_\_\_\_\_



**MRP: ₹ 400**

## Topics Covered:

- Number System
- Addition up to 1 – digit
- Subtraction
- Comparison
- Multiplication
- Money
- Time
- Geometry
- Measurement
- Patterns
- Problem solving

## Mental Maths

### Key Features:

- Stimulates brainpower
- Better understanding of maths concept
- Reduction in errors
- Strengthening of visualization power

### Exercise Pattern:


- Mental Calculation Exercise
- Mental Problem Solving Exercise





## Index

Worksheet	Page Number
Week - 1	1 to 2
Week - 2	3 to 4
Week - 3	5 to 6
Week - 4	7 to 8
Week - 5	9 to 10
Week - 6	11 to 12
Week - 7	13 to 14
Week - 8	15 to 16
Week - 9	17 to 18
Week - 10	19 to 20
Week - 11	21 to 22
Week - 12	23 to 24
Week - 13	25 to 26
Week - 14	27 to 28
Week - 15	29 to 30
Week - 16	31 to 32
Week - 17	33 to 34
Week - 18	35 to 36
Week - 19	37 to 38
Week - 20	39 to 40
Week - 21	41 to 42
Week - 22	43 to 44
Week - 23	45 to 46
Week - 24	47 to 48
Week - 25	49 to 50
Week - 26	51 to 52
Week - 27	53 to 54
Week - 28	55 to 56
Week - 29	57 to 58
Week - 30	59 to 60
Week - 31	61 to 62
Week - 32	63 to 64
Week - 33	65 to 66
Week - 34	67 to 68
Week - 35	69 to 70
Week - 36	71 to 72
Week - 37	73 to 74
Week - 38	75 to 76
Week - 39	77 to 78
Week - 40	79 to 80
Answer sheet	I to VI

## Solve the following exercises:


- Are you older than your father?  
a. Yes [ ] b. No [ ]
- $40 + 2 = [ ]$
- What day is tomorrow? [ ]
- How many wheels are there on two bikes?  
a. One [ ]  
b. Two [ ]  
c. Four [ ]
- Write the number name for 42. [ ]
- Which is smaller: A or B? [ ]  

- What number comes after 337? [ ]
- You have to buy one pencil box and it costs ₹ 50. Tick how much money do you need.  
₹ 20 [ ] ₹ 30 [ ] ₹ 50 [ ]  
a [ ] b [ ] c [ ]
- One more than 18 is [ ]
- One less than 20 is [ ]
- Look at the calendar in your class and write how many Saturdays are there in this month? [ ]
- Write the numeral ninety. [ ]
- What day was it yesterday? [ ]
- How many legs does your chair have? [ ]
- Write the total number of girls in your class. [ ]

## Solve the following exercises:

- Do the year 7 children wear bigger, smaller or the same sized clothes as year 2?  
Bigger [ ] Same size [ ] Smaller [ ]
- Which month comes after May?  
June [ ] July [ ]
- Write the numeral fifty. [ ]
- How many students are there in your class? [ ]
- $4 + 5 = [ ]$
- Half past [ ] or [ ] : 30  

- Write the numeral thirty one. [ ]
- Which is heavier: your school bag or one book? Tick.  
School bag [ ] A book [ ]
- How many coins are needed to make 15 paise? [ ]  

- What number is before 12? [ ]
- What day is the last day of the month? [ ]  
2006  
January  

Sun	Mon	Tue	Wed	Thu	Fri	Sat
	1	2	3	4	5	6
7	8	9	10	11	12	13
14	15	16	17	18	19	20
21	22	23	24	25	26	27
28	29	30	31			
- How many Mondays are there in May? [ ]

# Dev Nautics - Grade 1



MRP: ₹ 450

## Topics Covered:

- Numerals
- Number Name
- Number Sense (2 – digit numbers)
- Addition
- Subtraction
- Length
- Weight and Comparisons
- Time
- Money
- Geometrical Shapes and Solids
- Patterns
- Everyday Mathematics

## Maths Olympiad

### Key Features:

- Test the Understanding of Concepts
- Enriches with Analytical and Problem-solving Skills
- Build Confidence Among the Students
- Improve Academic Performance
- Stepping Stones for Future Competitive Exams












### Exercise Pattern:













- MCQs Exercise
- Critical Thinking Exercise







### Index

Worksheet	Page Number
Week 1	1 to 3
Week 2	4 to 6
Week 3	7 to 9
Week 4	10 to 12
Week 5	13 to 16
Week 6	17 to 19
Week 7	20 to 22
Week 8	23 to 25
Week 9	26 to 28
Week 10	29 to 31
Week 11	32 to 35
Week 12	36 to 39
Week 13	40 to 43
Week 14	44 to 46
Week 15	47 to 49
Week 16	50 to 53
Week 17	54 to 56
Week 18	57 to 60
Week 19	61 to 64
Answer sheet	I to III

- Which of the following is correct match?
  - a)  Twenty six
  - b)  Twelve
  - c)  Thirty
  - d)  Thirteen
- Which tree has oranges more than 3 but less than 5?
  - a) 
  - b) 
  - c) 
  - d) 
- 
  - a) 82
  - b) 89
  - c) 80
  - d) 79
- 2 tens + 4 tens =
  - a) 66 tens
  - b) 12 tens
  - c) 60 tens
  - d) 6 tens
- Choose the correct subtraction sentence for the given picture.
 
  - a) 3 tens 4 ones - 8 ones
  - b) 3 tens 2 ones - 1 tens 0 ones
  - c) 3 tens 4 ones - 9 ones
  - d) 3 tens 7 ones - 7 ones
- The difference between the number of stones in the 5<sup>th</sup> column and 3<sup>rd</sup> column is
 

- 55 is same as
  - a) 
  - b) 
  - c) 
  - d) 
- Which come in between?
 
  - a) 63
  - b) 36
  - c) 18
  - d) 54
- In a garden there are  
How many birds are there in the garden?
 
  - a) 24
  - b) 27
  - c) 25
  - d) 30
- 31+4 is show by which abacus?
  - a) 
  - b) 
  - c) 
  - d) 
- 
  - a) 57
  - b) 58
  - c) 56
  - d) 53
- 


Then which of the following is correct?

  - a) 
  - b) 
  - c) 
  - d) 


**Improve your Aptitude**

**WORKSHEET**

**Class 1**



[www.devnautics.com](http://www.devnautics.com)  
Dev Nautics Private Tuition  
8866713206



**MRP: ₹ 250**

## Topics Covered:

- Matching
- Sorting
- Classification
- Ordering
- Patterns
- Shadows
- Tiles
- Quantitative Quiz

## Exercise Pattern:

- Mental Calculation Exercise
- Mental Problem Solving Exercise

## Aptitude (Logical Reasoning)

### Key Features:

- Improve your prediction and observation power
- Enhance your Memory, Concentration and Calculations
- Booster dose to your common sense and presence of mind
- Improve cognitive prowess and mental ability
- Boost your problem solving abilities  
Give kick to your human intelligence









**CONTENTS**

<b>1. Matching</b>			<b>5 – 11</b>
Assignment 1 ... .. 5	Assignment 5 ... .. 9		
Assignment 2 ... .. 6	Assignment 6 ... .. 10		
Assignment 3 ... .. 7	Assignment 7 ... .. 11		
Assignment 4 ... .. 8			
<b>2. Sorting</b>			<b>12 – 17</b>
Assignment 8 ... .. 12	Assignment 11 ... .. 15		
Assignment 9 ... .. 13	Assignment 12 ... .. 16		
Assignment 10 ... .. 14	Assignment 13 ... .. 17		
<b>3. Classification</b>			<b>18 – 23</b>
Assignment 14 ... .. 18	Assignment 17 ... .. 21		
Assignment 15 ... .. 19	Assignment 18 ... .. 22		
Assignment 16 ... .. 20	Assignment 19 ... .. 23		
<b>4. Ordering</b>			<b>24 – 28</b>
Assignment 20 ... .. 24	Assignment 23 ... .. 27		
Assignment 21 ... .. 25	Assignment 24 ... .. 28		
Assignment 22 ... .. 26			
<b>5. Patterns</b>			<b>29 – 33</b>
Assignment 25 ... .. 29	Assignment 28 ... .. 32		
Assignment 26 ... .. 30	Assignment 29 ... .. 33		
Assignment 27 ... .. 31			
<b>6. Shadows</b>			<b>34 – 35</b>
Assignment 30 ... .. 34	Assignment 31 ... .. 35		
<b>7. Tiles</b>			<b>36</b>
Assignment 32 ... .. 36			
<b>8. Quantitative Quiz</b>			<b>37 – 39</b>
Assignment 33 ... .. 37	Assignment 35 ... .. 39		
Assignment 34 ... .. 38			
<b>Answers</b>			<b>40</b>









**Assignment-3**

**Matching**

Match each shape on this page with the same shape given below.

 1	 2	 3	 4
 5	 6	 7	 8

---







 a	 b	 c	 d
 e	 f	 g	 h







1	2	3	4
5	6	7	8

**Assignment-8**

**Sorting**

Each animal jigsaw is missing a piece. Find out which one is missing.

 1	 2	 3
 4	 5	 6

 a	 b	 c	 d	 e	 f
--	--	--	--	--	--

1	2	3
4	5	6

# Dev Nautics - Grade 1



**MRP: ₹ 400**

## Topics Covered:

- Me and My Surroundings
- Science and Technology
- Language and Literature
- Conservation of Plants and Animals
- Entertainment
- Maths Fun
- Life Skills
- Current Affairs
- Sports
- Our Country India and World
- Animal Kingdom
- Board Games
- Exploring the Sky
- Landmarks
- The Time
- Our World and Environment
- Monuments of the World
- My Country and My State
- Our National Flag
- Monuments of India
- Water

## GK (General Knowledge)

### Key Features:

- Develop your social, sensitive, reasoning, and analytical thinking skills
- Public Speaking will be easier
- Improved Mental Processes
- Improved Performance in General Knowledge
- Better understanding, and analysis of the situations
- Get aware with what's going around
- General knowledge improves the perception and cognitive ability of person

### Exercise Pattern:

- MCQs Exercise
- Question and Answer

## Index

Worksheet	Page Number
Chapter – 1 – Me and My Surroundings	1 to 3
Chapter – 2 – Science and Technology	4 to 6
Chapter – 3 – Language and Literature	7 to 8
Chapter – 4 – Conservation of Plants and Animals	9 to 12
Chapter – 5 – Entertainment	13 to 16
Chapter – 6 – Maths Fun	17 to 20
Chapter – 7 – Life Skills	21 to 22
Chapter – 8 – Current Affairs	23 to 26
Chapter – 9 – Sports	27 to 31
Chapter – 10 – Our Country India and World	32 to 34
Chapter – 11 – Animal Kingdom	35 to 40
Chapter – 12 – Board Games	41 to 44
Chapter – 13 – Exploring the Sky	45 to 48
Chapter – 14 – Landmarks	49 to 50
Chapter – 15 – The Time	51 to 54
Chapter – 16 – Our World and Environment	55 to 57
Chapter – 17 – Monuments of the World	58 to 60
Chapter – 18 – My Country and My State	61 to 64
Chapter – 19 – Our National Flag	65 to 67
Chapter – 20 – Monuments of India	68 to 70
Chapter – 21 – Water	71 to 73
Answer sheet	1 to 8

- Different parts of the body help us do different things. We use X to eat. X also helps us to talk. Which part of the body is X?  
a. Ear      b. Eye      c. Nose      d. Mouth
- This organ inside our body looks like a large walnut. It controls all the things that our body does. It helps us think. What part of the body is this?  
a. Lung      b. Heart      c. Brain      d. Stomach
- My parents have 3 children. I am the eldest. Next is Ravi. The last child is a girl. Priya. How is Priya related to me?  
a. Mother      b. Sister      c. Brother      d. Father
- Fill in the blank with help of the picture: Avi is \_\_\_\_\_.  
a. Happy      b. Sad      c. Afraid      d. Surprised
- Who worships in a mosque?  
a. Christians      b. Sikhs      c. Muslims      d. Hindus
- Which part of the body is covered with tiny taste buds that tell whether food is salty, sour, bitter or sweet?  
a. Skin      b. Tongue      c. Neck      d. Foot
- I help doctors take care of sick people. I care for and comfort patients. Who am I?  
a. Greengrocer      b. Soldier      c. Policewoman      d. Nurse
- Look at the picture. Who uses these tools?  
a. Tailor      b. Teacher      c. Carpenter      d. Pilot
- The vehicle in the picture is red in colour and has a siren. Where would you see this vehicle?  
a. Police Station      b. School      c. Hospital      d. Fire station
- If your friend fell off his cycle and injured himself, where would you take him?  
a. Police Station      b. School      c. Office      d. Hospital

Look at the image and recognise the following important Indian Landmarks:

- It is located in Agra, Uttar Pradesh.



- It is located in New Delhi. On the eve of Independence day, Prime Minister hoist the national flag here.



- It is the largest statue in the world of our famous leader Sardar Vallabhbhai Patel. It is located in Gujarat.




- It is a war memorial located near the Rajpath, New Delhi.



- It is a Buddhist complex, famous for its Great Stupa, on a hilltop at Sanchi Town in Raisen District of the State of Madhya Pradesh, India.





MRP: ₹ 450

## Topics Covered:

- Odd One Out
- What Comes Next
- Geometry
- Shapes
- Hidden Shapes
- Complete the Figure
- Similar Shapes
- Spatial Understanding
- Observations
- Analytical Reasoning
- Grouping
- Measuring Units
- Ranking and Ordering
- Problem Solving
- Analogy
- Estimation
- Visual Reasoning

## Mental Ability

### Key Features:

- Mental ability** is manifested through intelligent behaviour of an individual. The individual with normal intellectual **ability** will have the capacities as observing, understanding, learning, thinking, remembering and dealing with situations effectively.
- Improving power in different aspects of competency, including verbal, mathematical, spatial, and logical reasoning, which is one of the most important components of functional abilities for all.

### Exercise Pattern:

- MCQs Exercise
- Kinds of Reasoning



































## Index

Worksheet	Page Number
Chapter – 1 – Odd One Out	1 to 4
Chapter – 2 – What Comes Next	5 to 8
Chapter – 3 – Geometry	9 to 14
Chapter – 4 – Shapes	15 to 22
Chapter – 5 – Hidden Shapes	23 to 26
Chapter – 6 – Complete the Figure	28 to 30
Chapter – 7 – Similar Shapes	31 to 35
Chapter – 8 – Spatial Understanding	36 to 40
Chapter – 9 – Observations	41 to 46
Chapter – 10 – Analytical Reasoning	47 to 48
Chapter – 11 – Grouping	49 to 55
Chapter – 12 – Measuring Units	56 to 63
Chapter – 13 – Ranking and Ordering	64 to 69
Chapter – 14 – Problem Solving	70 to 75
Chapter – 15 – Analogy	76 to 82
Chapter – 16 – Estimation	83 to 88
Chapter – 17 – Visual Reasoning	89 to 102
Answer sheet	1 to 24





Binny Dagli (B.Sc. Com. Sci.)  
8866713206

## Grade 1 Subject: Mental Ability (Chapter – 1 – Odd One Out)

- Find the odd one out.
  - 
  - 
  - 
  - 
- Which figure is the odd one out?
  - 
  - 
  - 
  - 
- Find the odd one out.
  - 
  - 
  - 
  - 
- Which one does not belong to the group?
  - 
  - 
  - 
  - 
- Find the odd one out.
  - 
  - 
  - 
  - 
- Which figure does not belong to the group?
  - 
  - 
  - 
  - 
- Identify the one different from the rest.
  - 
  - 
  - 
  - 
- Which object is different?
  - 
  - 
  - 
  - 


1

## Grade 1 Subject: Mental Ability (Chapter – 14 – Problem Solving)

- Amit is taller than Bunny and Bunny is taller than Chetan. Who is tallest among them?
  - Chetan
  - Bunny
  - Amit
  - None of these
- Sonia needs some eggs to make a cake. Eggs are not more than five and not less than five. How many eggs she needs to buy?
  - 
  - 
  - 
  - 
- Aru has 5 biscuits, Charu has some biscuits. Together they have 7 biscuits. How many biscuits does Charu have?
  - 2
  - 4
  - 6
  - 3
- In the given figure, how many dots are there in the circle but not in the rectangle?
  - 8
  - 12
  - 6
  - 7
- Lata went from her house to Madhav's house, then they went to school. How much distance is travelled by Lata?
  - 2 km
  - 3 km
  - 3 km
  - 15 km
- There are 10 people in the rope skipping race, 5 fell down. How many people did not fall?
  - 2
  - 5
  - 1
  - 3
- In the given figure, how many flowers are there in the triangle as well as in the square?
  - 5
  - 4
  - 3
  - 6
- Three friends Rahul, Nikhil and Virat went to the zoo. Virat saw an elephant after both Rahul and Nikhil. Rahul saw the elephant second. Who saw the elephant first?
  - Rahul
  - Virat
  - Nikhil
  - Cannot be determined
- Three friends Rahul, Nikhil and Virat went to the zoo. Virat saw an elephant after both Rahul and Nikhil. Rahul saw the elephant second. Who saw the elephant last?
  - Virat
  - Nikhil
  - Rahul
  - Cannot be determined

70

## Dev Nautics - Grade 1



**MRP:** ₹ 2950

**Offer Rate:** ₹ 2655

Books	Price	No. of Pages
Mental Maths	₹ 400	86
Maths Magic (NCERT)	₹ 500	145
English Grammar Bank	₹ 500	107
Reasoning (Aptitude)	₹ 250	37
Mental Ability	₹ 450	102
General Knowledge	₹ 400	81
Olympiad Maths	₹ 450	67