

1. Which of the following does not belong to the collection of numbers?

- a) 431
- b) 534
- c) 436
- d) 432



2. Five hundred and fifteen ones are same as _____

- a) 550
- b) 551
- c) 505
- d) 515

3. How many tens are there in the sum of 50 and 40?

- a) 8 tens
- b) 9 tens
- c) 7 tens
- d) 90 tens

4. I am more than $10 + 10$ but less than $20 + 5$. Who am I?

- a) 18
- b) 27
- c) 23
- d) 15

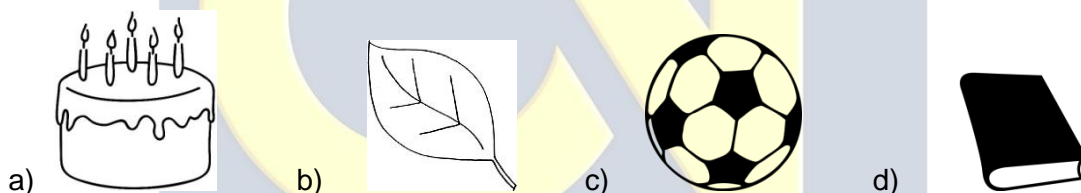
5. Nikhil sold 157 mangoes. Dipti sold 87 more mangoes than Nikhil. Harsh sold 23 less mangoes than Nikhil. How many mangoes did Harsh sell?

- a) 124
- b) 132
- c) 134
- d) 135

6. Rahul had 250 grams of Wheat. He buy 50 grams on Thursday and 120 grams on the Wednesday. How many total grams of wheat?

- a) 430 g
- b) 450 g
- c) 420 g
- d) 440 g

7. Which of the following is lightest in weight?



8. Which spring has the minimum number of coils?

- a) P
- b) R
- c) Q
- d) S



P



Q



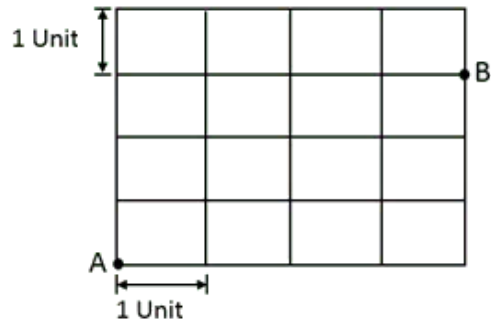
R



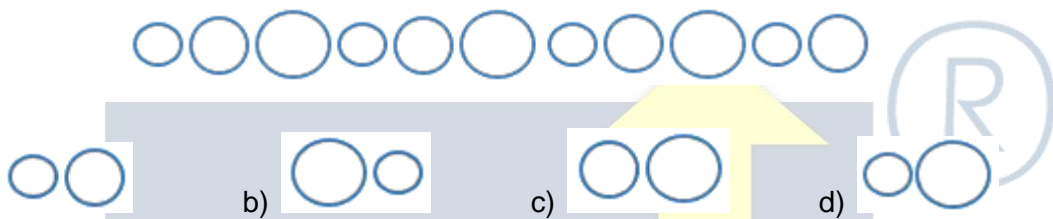
S

9. The minimum units travelled by A to reach B, if he moves only in horizontal and vertical direction, is _____.

- a) 6
- b) 8
- c) 7
- d) 5



10. Find the next figure to complete the given figure pattern below.



11. Complete the number series given: 11,21,31,41,51...

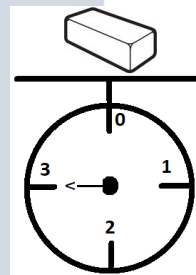
- a) 21
- b) 71
- c) 61
- d) 51

12. Raman is 138 cm tall and Suraj is 16 cm smaller than Raman. How small is Suraj?


- a) 122 cm
- b) 130 cm
- c) 125 cm
- d) 120 cm

13. What is the weight of the metal block?

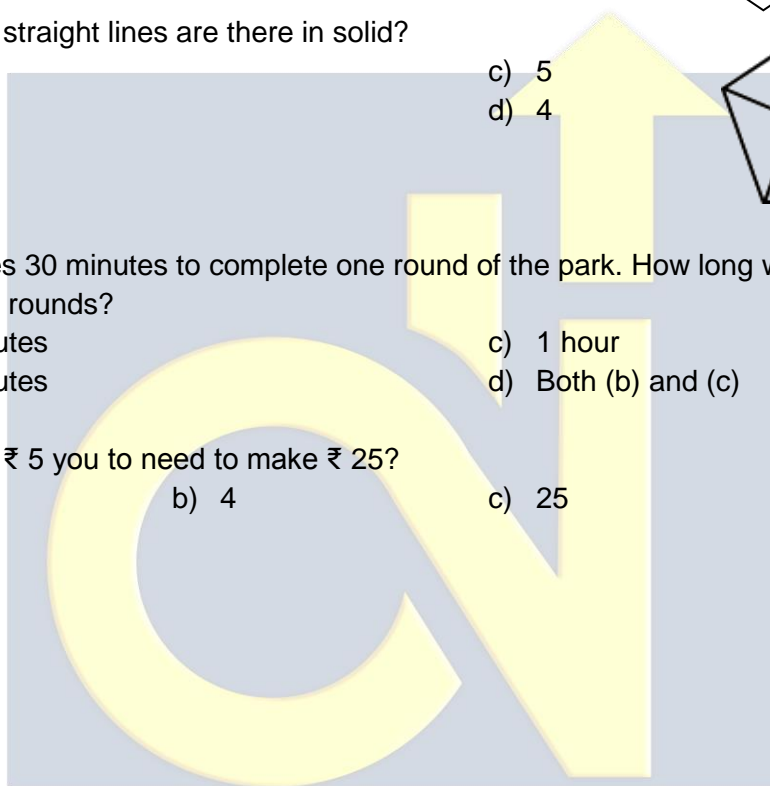
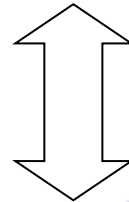
- a) 2 kg
- b) 5 kg
- c) 6 kg
- d) 3 kg



The figure shows the number of books sold by a leading bookstore in 4 different months. Study the graph and answer the following question.



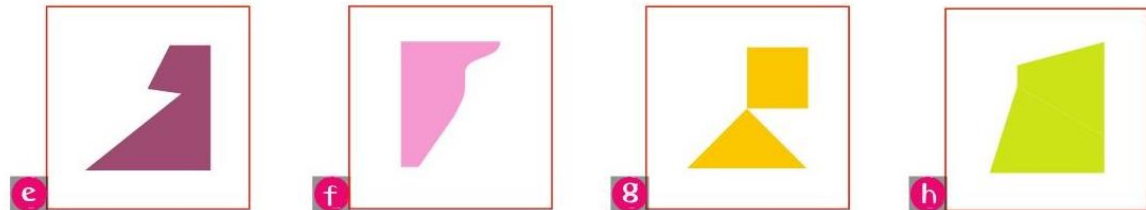

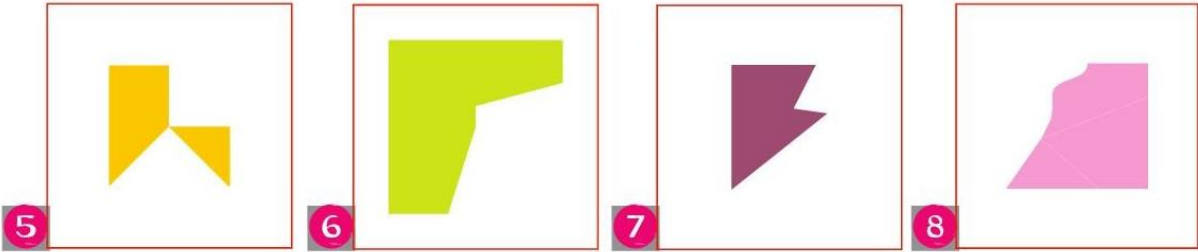
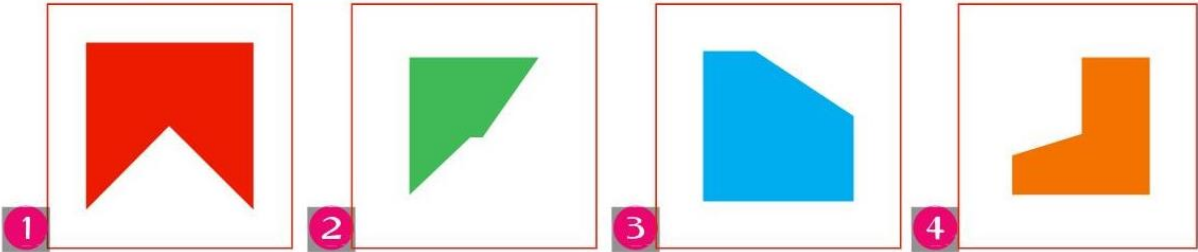
14. How many books were sold in month of March?
a) 14 b) 16 c) 18 d) 20
15. How many more books were sold in January than in February?
a) 28 b) 24 c) 10 d) 25
16. How many books were sold in four month altogether?
a) 68 b) 72 c) 34 d) 94
17. How many straight lines does the figure has?
a) 13 c) 12
b) 15 d) 10
18. How many straight lines are there in solid?
a) 10 c) 5
b) 8 d) 4
19. Ankita takes 30 minutes to complete one round of the park. How long will she take to complete 2 rounds?
a) 30 minutes c) 1 hour
b) 60 minutes d) Both (b) and (c)
20. How many ₹ 5 you to need to make ₹ 25?
a) 5 b) 4 c) 25 d) 6



Assignment-10

Sorting

Find the missing part.



1

2

3

4

5

6

7

8

Solve the following exercises:

1. How many toffees are there in the box? Circle the correct number.



10 or 20

2. $5 + 5 = [\quad]$

3. Write the numeral nineteen. []

4. What year is it now? []

5. Circle the shape that does not belong.



6. How many groups of 2? []



7. What day is it today? []

8. Put the correct sign > or <

29 [] 44

9. [] o'clock



10. Write the number that comes before thirty. []

11. 2, 4, 6, 8, []

12. How many days in a week do you go to school? []

13. Circle the groups of 3.



14. $6 + 10 = [\quad]$

15. How many fish did Uncle Sam catch altogether if he had 5 in his bucket and 4 in his net?



16. Colour every third number.

1	2	3	4	5	6	7	8	9	10
---	---	---	---	---	---	---	---	---	----

17. Write the numbers you coloured.

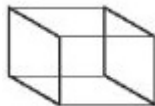
[], [], []

18. $10 - 0 = [\quad]$

19. $10 + 2 = [\quad]$

20. How many corners are there in this cube?

- a. 6
- b. 8
- c. 10



Dev Nautics